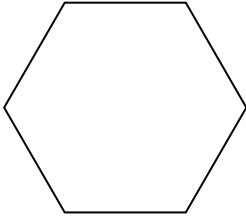




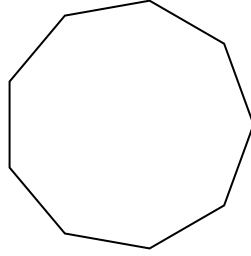
Determine if the shape shown is a regular shape or an irregular shape.

Answers

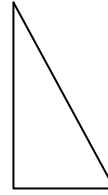
1)



2)




3)




1. _____

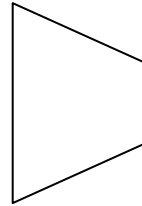
4)



5)

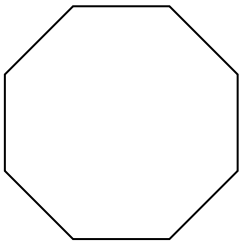


6)

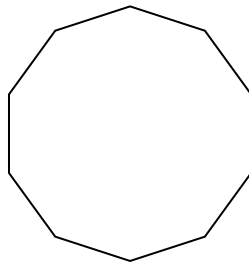


2. _____

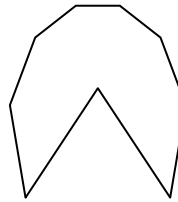
7)



8)



9)



3. _____

4. _____

5. _____

6. _____

7. _____

8. _____

9. _____

10. _____

11. _____


12. _____

13. _____

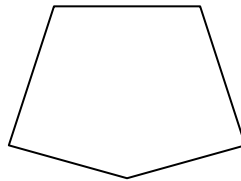
14. _____

15. _____

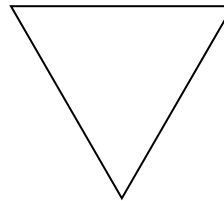
10)



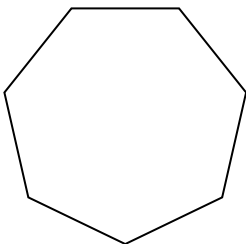
11)



12)



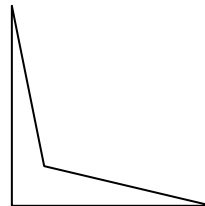
13)



14)



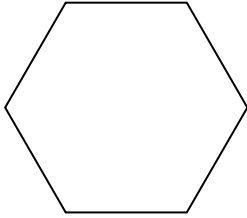
15)



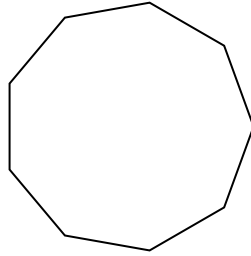


Determine if the shape shown is a regular shape or an irregular shape.

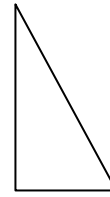
1)




2)




3)



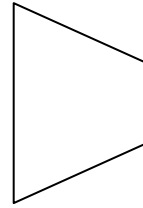
4)



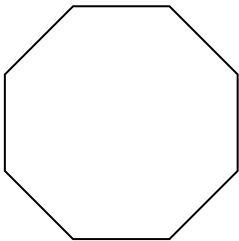
5)



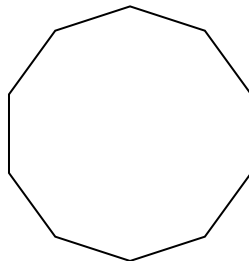
6)



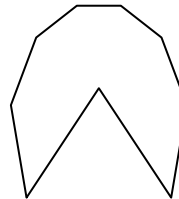
7)




8)



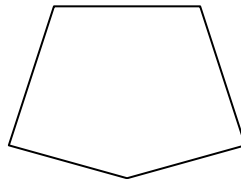
9)



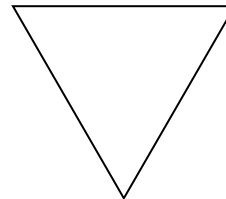
10)



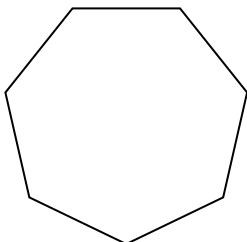
11)



12)



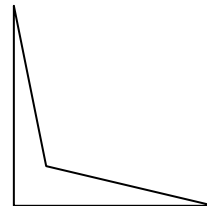
13)



14)



15)



Answers

1. Regular

2. Regular

3. Irregular

4. Regular

5. Irregular

6. Irregular

7. Regular

8. Regular

9. Irregular

10. Irregular

11. Irregular

12. Regular

13. Regular

14. Irregular

15. Irregular